

TEST #1 @ 130 points

Write in a neat and organized fashion. Use a straightedge and compass for your drawings.

1) Write the inverse, converse, and contrapositive of the following statement and classify the statements as true or false. If true, state the definition, postulate, or theorem your conclusion is based on. If false, say why or draw a counterexample.

"If two lines intersect and form equal adjacent angles, then they are perpendicular."

$P \rightarrow Q$

Circle one Justify your choice

True

False

definition of \perp lines

$\sim P \rightarrow \sim Q$
Inverse: if two ^{coplanar} lines don't intersect OR don't form equal adjacent angles, then they are not perpendicular

Circle one Justify your choice

True

False

$Q \rightarrow P$
Converse: if two ^{coplanar} lines are perpendicular, then they intersect and form equal adjacent angles

Circle one Justify your choice

True

False

$\sim Q \rightarrow \sim P$
Contrapositive: if two coplanar lines are not perpendicular, then they don't intersect or don't form equal adjacent angles

Circle one Justify your choice

True

False

2) Study each argument carefully to decide whether or not it is valid.

a) All people who apply for a loan must pay for a title search.
Cindy paid for a title search.
Therefore, Cindy applied for a loan. P

$P \rightarrow Q$
 Q

VALID: YES

People who pay for a title
• Cindy
People who apply for a loan

NO

b) If you are using this book, then you must be able to read.
If you are a geometry student, you must be able to read.
Therefore, if you are using this book, you are a geometry students. $P \rightarrow R$

$P \rightarrow Q$
 $R \rightarrow Q$
 $P \rightarrow R$

VALID: YES

NO

3) a) Complete the following law:

$$\sim(P \wedge Q) \equiv \underline{\sim P \vee \sim Q}$$

b) Prove the law using a truth table. State clearly why we can conclude from the truth table that the law is valid.

P	Q	$\sim(P \wedge Q)$	$\sim P \vee \sim Q$
T	T	F	F
T	F	T	T
F	T	T	T
F	F	T	T

The law is valid because $\sim(P \wedge Q)$ and $(\sim P \vee \sim Q)$ have exactly the same truth values

4) Answer true or false:

1) The hypotenuse is the side opposite one of the acute angles in a right triangle. F

2) A right isosceles triangle has two right angles. F

3) If three angles of one triangle are congruent with three angles of a second triangle, then the two triangles are congruent. F

4) Triangles can be proved congruent using SSA. F

5) Corresponding parts of congruent triangles are congruent. T

6) An exterior angle of a triangle is the supplement of one of the interior angles of the triangle. T

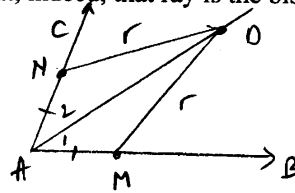
4) Choose only ONE of the following . Do not do both.

Given an angle $\angle BAC$, construct using only a compass and a straightedge, the bisector \overline{AD} of the given angle. Explain how you are constructing it and then prove that, indeed, that ray is the bisector of the angle.

Given: $\angle BAC$

Construct: \overrightarrow{AD} - bisector

(Condition: $m\angle BAD = m\angle CAD$)



Solution

1. Let $M \in \overline{AB}$
2. Mark off $N \in \overline{AC}$ such that $\overline{AN} \cong \overline{AM}$
(OR instead of 1&2: construct circle center A and a radius r that intersects \overline{AB} , \overline{AC} at M and N, respectively)

3. Construct circle C_1 - center M, radius r
 C_2 - center N, radius r

4. $C_1 \cap C_2 = \{D\}$
5. Prove that \overrightarrow{AD} = bisector of $\angle BAC$

(2 points determine one line, so the construction is unique)

OR

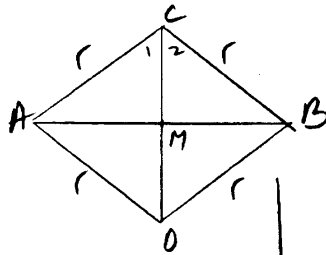
ΔADM	$\left\{ \begin{array}{l} \overline{AD} \cong \overline{AD} \\ \overline{AM} \cong \overline{AN} \\ \overline{MD} \cong \overline{ND} \end{array} \right.$	reflexive \cong by construction by construction
ΔADN		
$\Delta ADM \cong \Delta ADN$ (SSS)		
$\Rightarrow \angle A_1 \cong \angle A_2$ (CPCTC)		
$\Rightarrow \overrightarrow{AD}$ bisector of $\angle BAC$ (def)		

Given a segment, construct using only a compass and a straightedge, the midpoint of the segment. Explain how you are constructing it and then prove that, indeed, the point constructed is the midpoint of the given segment.

Given: \overline{AB}

Construct: $M = \text{midpoint}$

(Condition: $\overline{AM} \cong \overline{MB}$, $M \in \overline{AB}$)

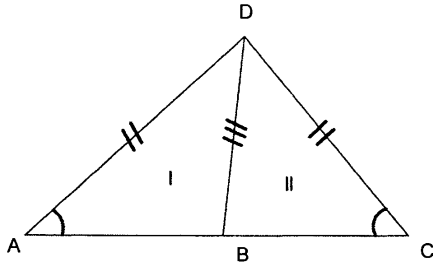


Proof

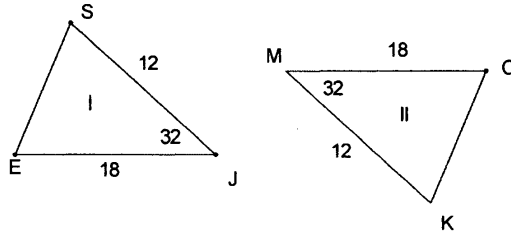
1. Let \overline{AB} - given segment
2. Construct circle C_1 - center A, $r > \frac{AB}{2}$
 C_2 - center B, r
3. $C_1 \cap C_2 = \{C, D\}$
4. Connect center D (2 points determine one line)
5. $\overline{CD} \cap \overline{AB} = \{M\}$
6. Prove that $M = \text{midpoint}$

ΔACD	$\left\{ \begin{array}{l} \overline{CD} \cong \overline{CD} \\ \overline{AC} \cong \overline{BC} \\ \overline{AD} \cong \overline{BD} \end{array} \right.$	reflexive \cong construction (= r)
ΔBCD		
$\Delta ACD \cong \Delta BCD$		SSS
$\angle C_1 \cong \angle C_2$		CPCTC
ΔACM	$\left\{ \begin{array}{l} \overline{AC} \cong \overline{BC} \\ \overline{MC} \cong \overline{MC} \\ \angle C_1 \cong \angle C_2 \end{array} \right.$	construction reflexive \cong above
ΔBCM		
$\Delta ACM \cong \Delta BCM$		SAS
$\overline{AM} \cong \overline{BM}$		CPCTC
$M = \text{midpoint of } \overline{AB}$		def. of midpoint

- 6) i) Write the congruences given by the indicated measures or marks.
 ii) State whether from the given congruences only you may conclude that triangles I and II are congruent.
 iii) If so, write what case of congruency applies.

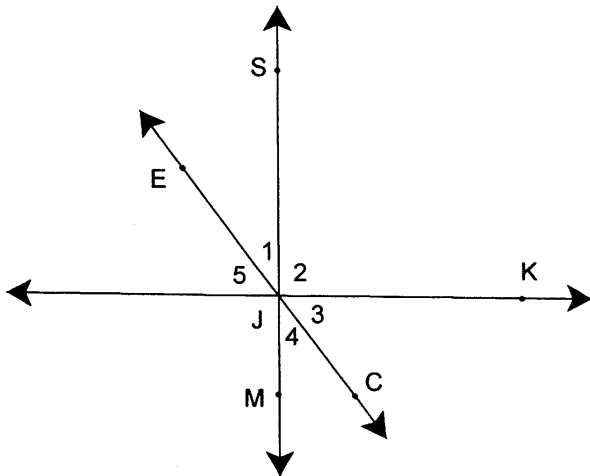


- i) $\overline{AD} \cong \overline{CD}$
 $\overline{BD} \cong \overline{BD}$
 $\angle A \cong \angle C$
 ii) $\triangle I \not\cong \triangle II$ NO
 iii) N/A



- i) $\begin{cases} \overline{SJ} \cong \overline{KM} \\ \overline{EJ} \cong \overline{CM} \\ \angle J \cong \angle M \end{cases}$
 ii) $\triangle SJE \cong \triangle MKC$ YES
 iii) SAS

7)



Given $\overline{JK} \perp \overline{SM}$
 $m\angle EJK = 105^\circ$

Find angles 1 through 5
 (justify each step)

Solution
 $m\angle 2 = 90^\circ$ ($\overline{JK} \perp \overline{SM}$)
 $m\angle 1 = 105^\circ - 90^\circ = 15^\circ$ (Angle Addition Postulate and Addition Prop. of =)
 $m\angle 4 = m\angle 1 = 15^\circ$ (vertical \angle 's)
 $m\angle 5 = 90^\circ - m\angle 1 = 90^\circ - 15^\circ = 75^\circ$ ($m\angle 1 + m\angle 5 = 90^\circ$)
 $m\angle 3 = m\angle 5 = 75^\circ$ (vertical \angle 's)

8) A triangle ABC is given.

a) Draw a scalene triangle.

b) Check all that applies:

A scalene triangle can be :

- acute right obtuse none

c) Name the following:

- the angle opposite side \overline{AC} $\angle B$
- the side opposite angle ABC \overline{AC}
- the angle included by \overline{BC} and \overline{AC} $\angle C$
- an exterior angle of the triangle (make sure to mark it on the drawing) $\angle DBC$

d) Draw the bisector of angle A, name it \overline{AM} , and state, using mathematical notation, that \overline{AM} is the bisector of angle A (what does it mean?).

\overline{AM} bisector of $\angle A$ iff $m\angle 1 = m\angle 2$

e) Draw the altitude from vertex B to the opposite side, name it \overline{BN} , and state, using mathematical notation, that \overline{BN} is an altitude (what does it mean?).

\overline{BN} altitude iff $\overline{BN} \perp \overline{AC}$, $N \in \overline{AC}$

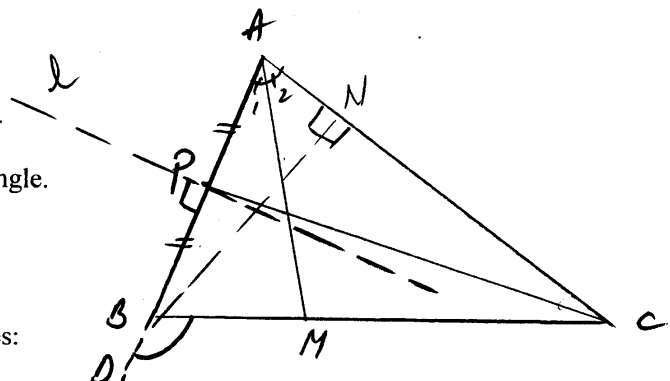
f) Draw the median from vertex C, name it \overline{CP} , and state, using mathematical notation, that \overline{CP} is a median (what does it mean?).

\overline{CP} -median iff $P \in \overline{AB}$, $\overline{PA} \cong \overline{PB}$

g) Draw the perpendicular bisector of side \overline{AB} , name it l , and state, using mathematical notation, that l is the perpendicular bisector of \overline{AB} (what does it mean?).

l -perpendicular bisector of \overline{AB} iff $l \perp \overline{AB}$ at P where $P = \text{midpt of } \overline{AB}$

OR: $l \perp \overline{AB}$, $l \cap \overline{AB} = P$
 $\overline{PA} \cong \overline{PB}$

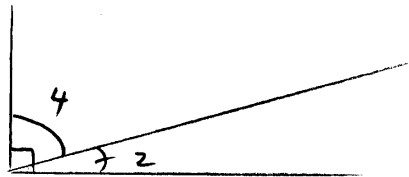
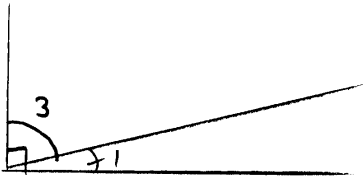


9) First, complete the theorem:

Complements of equal angles are equal in measure.

Then, prove the theorem (formal proof).

Make sure you state the hypothesis and conclusion of the theorem and make a drawing.



Given:

$\angle 1$ and $\angle 3$ are complementary
 $\angle 2$ and $\angle 4$ are complementary
 $m\angle 1 = m\angle 2$

Prove:

$m\angle 3 = m\angle 4$

Proof

1. $\angle 2$ and $\angle 4 = \text{compl.}$
 $\angle 1$ and $\angle 3 = \text{compl.}$
2. $m\angle 1 + m\angle 3 = 90^\circ$
 $m\angle 2 + m\angle 4 = 90^\circ$
3. $m\angle 1 + m\angle 3 = m\angle 2 + m\angle 4$
4. $m\angle 1 = m\angle 2$
5. $m\angle 1 + m\angle 3 = m\angle 1 + m\angle 4$
6. $m\angle 3 = m\angle 4$

1. given
2. def. of compl. \angle 's
3. transitivity (substitution)
4. given
5. substitution
6. +/- prop of =

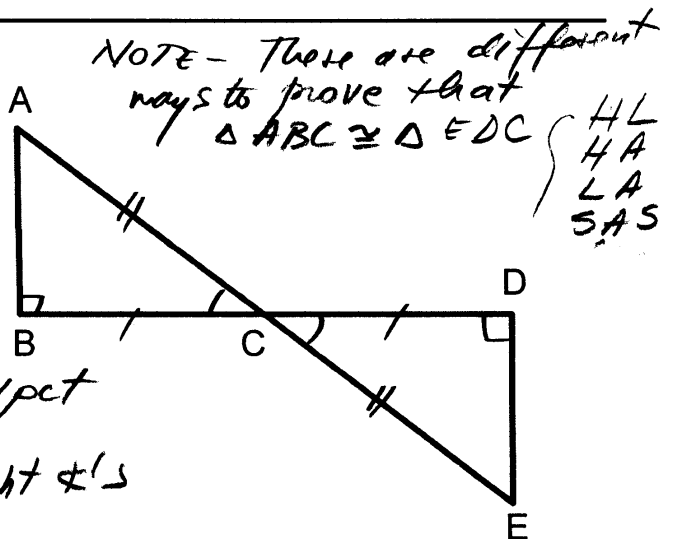
11) Given: C is the midpoint of \overline{AE} and \overline{BD}
 $\overline{AB} \perp \overline{BD}$
 $\overline{DE} \perp \overline{BD}$

Prove: $\overline{AB} \cong \overline{DE}$ (formal proof)

Proof

1. $C = \text{midpt } \overline{AE}, \overline{BD}$
2. $\overline{BC} \cong \overline{CD}, \overline{AC} \cong \overline{CE}$
3. $\overline{AB} \perp \overline{BD}, \overline{DE} \perp \overline{BD}$
4. $\angle B, \angle D = \text{right } \angle$'s
5. $\triangle ABC \cong \triangle EDC$
 $\left\{ \begin{array}{l} \overline{AC} \cong \overline{CE} \\ \overline{BC} \cong \overline{CD} \\ \text{right } \angle$'s \end{array} \right.
6. $\triangle ABC \cong \triangle EDC$
7. $\overline{AB} \cong \overline{DE}$

1. given
2. def. of midpt
3. given
4. \perp iff right \angle 's
5. $\left\{ \begin{array}{l} (2) \text{ above} \end{array} \right.$
6. HL
7. CPCTC

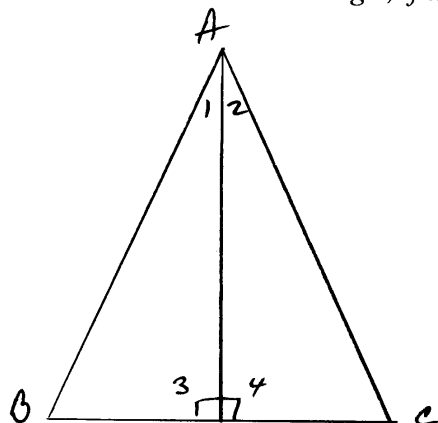


NOTE - There are different ways to prove that $\triangle ABC \cong \triangle EDC$

- HL
- HA
- LA
- SAS

12) Draw a figure and write the hypothesis and conclusion. Mark the figure and write a formal proof.

In a triangle, if an angle bisector is an altitude, then it is also a median.



Given: $\triangle ABC$
 \overline{AD} bisector of $\angle A$
 \overline{AD} altitude

Prove: \overline{AD} - median

(condition: $\overline{BD} \cong \overline{DC}$)

Proof

1. \overline{AD} = altitude
2. $\overline{AD} \perp \overline{BC}$
3. $\angle 3 \cong \angle 4$
4. \overline{AD} = bisector of $\angle A$
5. $\angle 1 \cong \angle 2$
6. $\triangle ABD \cong \triangle ACD$
 - $\overline{AD} \cong \overline{AD}$
 - $\angle 1 \cong \angle 2$
 - $\angle 3 \cong \angle 4$
7. $\triangle ABD \cong \triangle ACD$
8. $\overline{BD} \cong \overline{DC}$
9. D = midpt of \overline{BC}
10. \overline{AD} = median

1. given
2. def. altitude
3. \perp iff \cong adj. \angle 's
4. given
5. def \angle bisector
6. reflexive prop. of \cong
 - (5) above
 - (3) above
7. ASA (or LA)
8. CPCTC
9. def. midpt
10. def. median